



D.A.V. PUBLIC SCHOOL

NH-3, NIT. FARIDABAD

SESSION: 2024 - 2025

ASSIGNMENTS

CLASS: IV

“In our class we don’t do easy. We make easy happen through hard working and learning.”



Email Id : davnh3fbd@gmail.com

WebSite : davnh3school.org.in

Subject- ENGLISH
WORKSHEET 1
Reading Comprehension
❖ **Compare and Contrast**

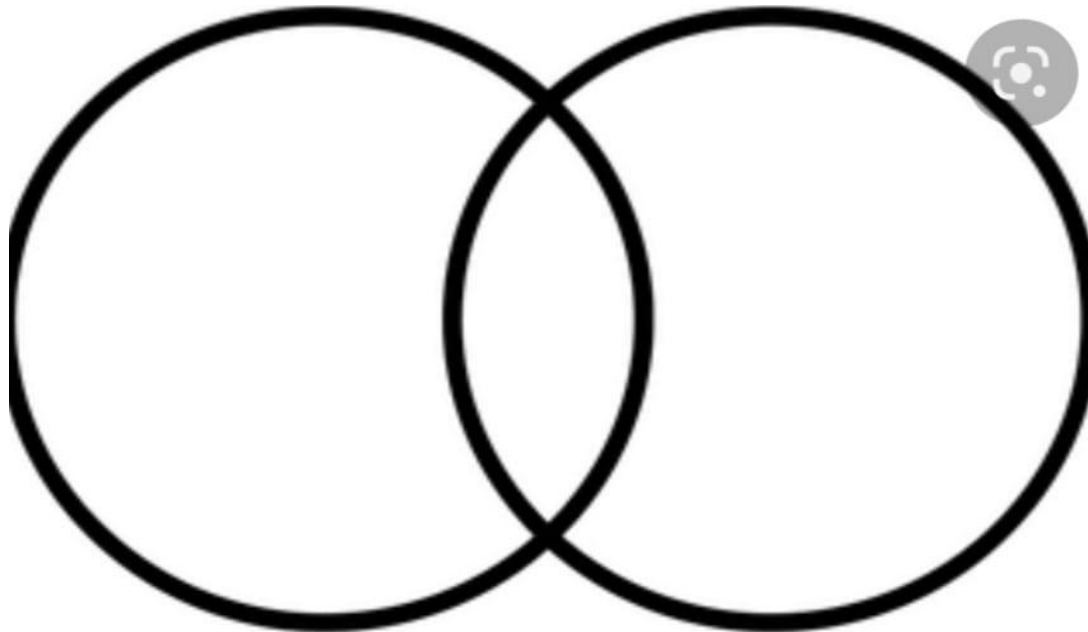
SPORTS

Basketball and Rugbyball are two fun sports. Both sports involved a ball, two teams, offence and defence. Both need a coach, players, and a ball. Basketball is played on a court, while Rugbyball is played on a field. A basketball is round, orange ball and a Rugbyball is an oblong, brown ball. Both sports are played through high school and college. They can also both be played professionally. The two sports are completely different, but at the same time they have some similarities.

Complete the Venn Diagram after reading the passage:

BASKETBALL

RUGBY BALL



Q1. The two sports have in common?

Both sports played with a ball only

They both are played on a field

They both are round in shape

Q2. Basketball different from Rugby ball?

Both are played in high school only

Basketball is a round, orange ball
Basketball is an oblong ball in shape

❖ FACT & OPINION

➤ Read the following statements. Write Fact or Opinion after each statement:

1. Lion is the king of jungle. _____
2. People shouldn't litter. _____
3. Fruits and vegetables are part of a healthy diet. _____
4. Many students come to school on the bus. _____
5. Cricketers are good role models. _____

GRAMMAR



Match the columns:

Collective Nouns

- Pride
- Bunch
- Pair
- Shoal
- Colony

Common Nouns

- shoes
- fish
- ants
- lions
- keys

➤ Punctuate the given sentences:

a) penny knows prof. peter

Ans: _____

b) new York is in America

Ans: _____

➤ Rearrange the jumbled words and make meaningful sentence.

a) nearly/ tank/ is / the/ full.

Ans: _____

b) twinkle/ stars/ at/ night.

Ans: _____

➤ Find proper nouns , common nouns and collective nouns from the word grid:

E	T	E	A	C	H	E	R	X	M
P	I	C	H	P	F	J	V	X	A
W	G	S	B	V	B	Z	Q	T	O
G	E	M	Z	L	I	T	T	E	R
D	R	A	N	C	H	I	W	J	K
S	A	L	M	A	N	Q	Z	X	B

➤ Put the words in the correct boxes:

King, tigress, laborer, poet, sister,
friend, player, lawyer, nephew
son, aunt


Masculine	Feminine	Common

--	--	--

➤ Complete the following sentences using a verb form that agrees with the subject:(SVA)


1. A large number of students _____ absent today. (is / are)
2. The majority of criminals _____, non-violent. (is / are)
3. The information _____ correct. (is / are)
4. I _____ lifting a heavy box.(is/am)

➤ Look and colour the pictures given below & fill in the correct PREPOSTIONS:




1. The monkey is sitting _____ the trees


in
on
over
under
above
below
behind
between




2. The dog is sitting _____ a chair.




3. The mouse is hiding _____ the bed.



4. The fox is waiting _____ the tree.



5. The fan is _____ my head.
I am _____ the fan.



6. The lizard and the fly are _____ the wall.
The lizard is _____ the fly.
The fly is _____ the lizard.

WORKSHEET 2

❖ Look at the picture given below and describe it in your own words:



❖ Write the homophones of the given words:

i) whether- _____

ii) wait - _____

iii) eight - _____

iv) no- _____

❖ Answers the given questions:

Q1. What warning did the Principal give Rahul?

Ans:

Q2. Why was everyone surprised to see the term end examination result?

Ans:

❖ Write the meaning of given words:

- i)betray - _____ iii)admitted- _____
ii)apologized - _____ iv) secure - _____

❖ Circle the correct spellings:

- i) true truu trau
ii) athaletics atheletics athelatics

❖ Match it with correct Antonym:

- i)less sad
ii) happy more

❖ Given below are eight highlights from the story but their order is mixed up. Sequence & number them correctly in which they occur in the story:

	Raj forgave Rahul for his mistake.
	Rahul could not sleep that night and apologised to Raj and to the Principal.
	Rahul reached the gornd and dug a small pit on the path where Raj was supposed to run.
	Rahul was determined to win the race.
	Rahul became jealous of raj and started talking lesser and lesser with him.

	The sports day was near so every new as practising for it.
	Raj stepped on the pit and fell down. He got hurt and lost the race.
	Rahul and Raj were the best friends.
	Raj always managed to win.He was ahead in studies and sports.
	Raj helped Rahul to prepare for the final examination.
	Rahul was not happy after winning the race.

अभ्यास कार्य
पाठ फैलती चप्पलें

बहुविकल्पीय प्रश्न

प्रश्न 1 निम्न प्रश्नों को पढ़कर सही उत्तर को चिह्नित कीजिए-

क. सुप्पंदी अपनी दादी के लिए क्या लेने गया ?

क चप्पलें

ख जूते

ख. दादी ने सुप्पंदी से चप्पलें बदलवाने के लिए क्यों कहा ?

क. क्योंकि नाप में बड़ी थी

ख क्योंकि नाप में छोटी थी

ग. गर्म होने से पटरियाँ कैसी हो जाती है ?

क. फैलती हैं

ख. सिकुड़ती हैं

घ दादी ने चप्पलें कहाँ से मँगवाई?

क दुकान से

ख आँगन से

ड. चप्पलें किस पर रखने से गायब हो गई ?

क तवे पर
ख चूल्हे पर

प्रश्न2 . निम्न वाक्य किसने किससे कहे सही उत्तर को चिह्नित कीजिए-

अ दादी माँ चप्पलें गायब हो गई हैं ।

क. दादी माँ ने सुप्पंदी से

ख. सुप्पंदी ने दादी माँ से

ब हो गया सत्यानास !

क. दादी माँ ने सुप्पंदी से

ख. सुप्पंदी ने दादी माँ से

प्रश्न3 क . निम्न में से शुद्ध शब्द को चिह्नित कीजिए -

अ प्लास्टिक ब प्लास्टिक

अ सत्यानाश ब सत्यानास

प्रश्न4 दिए गए संयुक्त व्यंजन से शब्द बनाइए -

प्य _____

क्य _____

ल्ल _____

न्ना _____

प्रश्न5 निम्न शब्दों के विलोम शब्द लिखिए-

गरम _____ एक _____

नई _____ जोड़ना _____

खरीदना _____ छोटी _____

लंबी _____ गर्मी _____

प्रश्न6 . निम्न शब्दों का उचित प्रयोग करते हुए खाली स्थान भरिए-

क. भाप से मेरा हाथ _____ गया । (झूलसना)

ख. सारे कागज़ _____ गए। (जलना)

प्र०7 इ व ढ वर्ण से शब्द बनाओ-

इ _____

ढ _____

प्र०8 शब्द लड़ी बनाइए

अनार _____

प्र०1 ऐसी पाँच चीजों के नाम लिखिए जो गर्म होने पर अपना आकार बदल देती हैं

गिनती 1-20

अभ्यास कार्य

निम्न अंग्रेजी संख्याओं को हिंदी में अंकों व शब्दों में लिखिए -

संख्या	अंकों	शब्दों
5	_____	_____
18	_____	_____
6	_____	_____
17	_____	_____
1	_____	_____
13	_____	_____
9	_____	_____
14	_____	_____

बहुविकल्पीय प्रश्न

1. निम्न में से 11 का शुद्ध रूप शब्द कौन सा है?

क ग्याहरा ख ग्यारह

2. निम्न में से 5 का शुद्ध रूप शब्द कौन सा है?

क पाच ख पाँच

3 . निम्न में से 12 का शुद्ध रूप शब्द कौन सा है?

क बारह ख बाहर

4. निम्न में से 17 का शुद्ध रूप शब्द कौन सा है?

क सतराह ख सत्रह

पाठ उलटा पुलटा

प्र०1 निम्न काव्यांश को ध्यानपूर्वक पढ़कर निम्न प्रश्नों के उत्तर दीजिए -

चींटी गिरती , मकड़े गिरते , गिरगिट गिरते और सँभलते
गिरने पर वे साहस खोकर कभी न अपनी आँखें मलते
गिरने और पिछड़ने पर जो हिम्मत खोते , पछताते हैं ।
धूल झाड़ जो तुरंत सँभलते वे जीवन में सुख पाते हैं ।

बहुविकल्पीय प्रश्न

1. कविता उलटा पुलटा के कवि कौन है?

क हजारी प्रसाद द्विवेदी

ख भगवती प्रसाद द्विवेदी

2. निम्न में से संज्ञा शब्द कौन सा है?

क. छिपकली

ख. गिरता

3. झटक शब्द का समान लय वाला शब्द कौन सा है?

क. झट

ख भटक

4. कौन से व्यक्ति जीवन में सुख पाते हैं ?

क. साहसी

ख आलसी

5. निम्न में से अनुनासिक शब्द कौन सा है?

क. तुरंत

ख सँभलते

प्रश्न 2 निम्न शब्दों के दो दो पर्यायवाची शब्द लिखिए-

हाथ _____
पैर _____
आँख _____
बंदर _____

प्रश्न 3 निम्न शब्दों के विलोम शब्द लिखिए-

नीचे _____ सीधे _____
उठना _____ मृत्यु _____
हंसना _____ पराए _____

प्रश्न 4 निम्न शब्द में से नए शब्द छाँटकर लिखिए

क. छिपकली = _____

प्रश्न 5 कविता में प्रयोग हुए शरीर के अंगों के नाम लिखिए-

प्रश्न 6 . उचित स्थान पर व अनुस्वार व अनुनासिक लगाइए -

क.चीटी ख बदर ग . आख घ. सभाल

प्रश्न 7 .निम्न शब्दों से वाक्य बनाइए -

क चलते - चलते _____

ख हिम्मत _____

प्रश्न 8 बादल में दिए गए शब्दों में से व्यक्ति वाचक व जाति

वाचक शब्द छाँटकर लिखिए

ताजमहल , विद्यालय , राजा , गंगा , महात्मा गाँधी , अध्यापक

व्यक्ति वाचक _____

जाति वाचक _____

प्रश्न शब्द लड़ी पूरी कीजिए

साहस _____

Mathematics

Ch-1 Numbers up to 9,99,999

I) Fill in the blanks :

- a) The places ones, tens and hundreds belong to the _____ period.
- b) The numeral just before 10,000 is _____.
- c) The period of the digit _____ in 7,48,961 is lakhs.
- d) The sum of the place value of 8 and 2 in the number 84264 is _____.
- e) Standard form of $9000 + 400 + 20 + 0 =$ _____.
- f) $31,938 = _ \times 10,000 + 1 \times _ + _ \times 100 + 3 \times _ + _ \times 1$
- g) _____ is the numeral just after 89,999.

II) Write the number name for the following ;

- a) 9,24,672= _____
- b) 5,00,012= _____

III) Write the following numerals in expanded form in three different ways:

- a) 1,47,814

b) 5,55,555

IV) Write the numeral which is one less than the greatest 5- digit number?

V) Rewrite the set of numerals in descending order;

a) 9,00,909 ; 9,90,909 ; 9,99,909 ; 9,00,009

b) 8,00,908 ; 80,888 ; 8,08,900 ; 8,90,900

VI) Write down the period ,place and place value of the digits underlined:

Numerals	Periods	Place	Place Value
<u>6</u> 1,242			
5,40, <u>9</u> 0 <u>1</u>			
<u>7</u> ,98,620			
2, <u>9</u> 41			

VII) Write the standard numerals for the following:

a) $4,00,000 + 2,000 + 100 + 0 + 1 =$ _____

b) $60,000 + 300 + 0 + 0 =$ _____

c) $9,000 + 0 + 10 + 9 =$ _____

VIII) Compare and put sign $>$, $<$ or $=$:

a) 90099 _____ 99009

b) 1,01,201 _____ 1,01,100

c) Smallest 6 digit number _____ Greatest 6-digit number

d) Greatest 8 digit number _____ Smallest 8 – digit number

IX) Find the difference of the place value of 9 and 6 in the given numeral :
89,260

X) Write the smallest and greatest digit number using digits – 8,3,7,5,1,0. Find the difference between the two.

XI) Name the places of a six digit number .

XII) How many thousands are there in 1 lakh.?

XIII) Write the numeral for the following :-

- a) 8 lakhs + 6 ten thousands + 0 hundreds + 7 tens + 0 ones. _____
- b) Fifty two lakh one thousand six. _____
- c) Seventy four thousand six hundred seventy _____
- d) $4000 + 600 + 0 + 9$ _____

XIV) Do as directed:-

a) Write the number name and numeral for the following:-

6 Lakhs + 7 ten thousands + 0 thousands + 1 hundreds + 1 tens + 0 ones

Numeral = _____

Number Name

= _____

b) Compare the place value of the underlined digits in the numeral **5 8 9 3 2**

c) Draw an abacus and show the place value of the underlined digit in **7 9 9 0 7 5**

d)

SOCIAL SCIENCE
Ch- 1 (Family Responsibilities)

1. Name them:

- 1) The first school of a child . _____
- 2) Movement of people to other places in search of better opportunities .

- 3) Surname of Angad's family. _____
- 4) Two occasions when the family members get together.

- 5) Two household chores that the family members share.

2. Sit with your parents and write five moral values that are important for children to grow into good human beings.

3. Choose the correct answer:-

- 1) Joint family (**discourages** / **encourages** family members to be co-operative and accommodating.
- 2) The family fibre, in India, is changing very (**slow** / **fast**).

3) Family members provide companionship by spending time (**alone / together**).

4) A joint family (**support/ ignore**) the other members.

5) (**Parents/ Grand parents**) support the children in Nuclear family.

4. Source Based Questions:-

The family system is changing very fast. Joint family system, which was very strong in India, is changing as people are moving to different parts of the country and the world. They migrate to other places in search of better jobs and educational opportunities or suitable climate.

On the basis of your reading, give answers of the following:-

1. In earlier times which family system was more?

2. Write two reasons for migrations.

3. True/ False

People cannot move from one place to another. _____

5. Case Based:-

Raghav's uncle works in a bank. He has been transferred to Ladakh. His wife and two children are also going with him. The whole family is feeling very sad.

Raghav's uncle, Sandeep and his wife, Suman rent a house in Ladakh. Their children Riya and Vishal miss their grandparents, uncles, aunts and cousins. Their parents are helping them to adjust to a nuclear family.

On the basis of your reading, give answers of the following:-

Q1 What type of family does Angad have? _____

Q2 **True/ False**

Grandparents help the children to adjust in a nuclear family.

Q3 Raghav's uncle has been transferred to (Manipur/ Ladakh)

Ch-2

Topic- Sensitivity Towards Others

Q-1 Fill in the blanks:-

1. Family plays an important role in building _____ bonds of love and care.
2. We should talk _____ with everyone.
3. _____ impaired children are taught the sign of language.
4. We should not make _____ remarks about anyone's religion, caste and language.
5. A deaf person cannot _____.

Q-2 Write True/False for the given statements:-

1. Children can share in the house hold chores . _____
2. No one are sensitive to the needs of others . _____
3. A society is an organized group of people. _____
4. Children develop a caring attitude towards other by watching their parents. _____
5. Every one should be ready to help a child and an old person. _____

Q3 Case Study:

Seema lives in a Joint family where everyone cares for the comfort of others. She plays quietly when her grandmother rests. All the neighbourhood children have also become conscious and do not make noise while Seema's grandmother is sleeping.

On the bases of your reading give answers of the following questions:-

1. Name any two games that we can play without making noise.

a. _____ b. _____

2. We should care for the _____ of other family members.

3. True/ False

Children learn good manners from their family members.

Q-3 Name the following:-

- First teacher who taught hearing impaired students.

- First person who wrote book to educate hearing impaired people.

- Language that is taught to visually impaired/blind people.

- It relieves stress.

- Good citizens are made here

Q- 4 Look at the picture and complete the sentence-

Old person, depend, sensitive, hand



All of us _____ upon one another for different reasons. Most people are _____ to the needs of

others. Everyone is ready to hold a _____ of a child and an _____ while crossing the road.

SCIENCE

Q 1 Fill in the blanks

- a) _____ pushes the food into the food pipe at the time of swallowing.
- b) The food is partially digested in the _____.
- c) _____ and _____ pour their juices into the small intestine.
- d) The undigested semi solid waste is collected in the _____ and is eliminated through the _____.
- e) Cooked food when left uncovered or unrefrigerated for long, can also cause _____.
- f) _____ and _____ are broad and grooved teeth present at back of the mouth.

Q 2 Edit the statements

- a) Stomach and small intestine are external organs.
- b) Human beings have only one set of teeth.
- c) Unwashed fruits and vegetables can also carry eggs of worms.
- d) Peeled and cut fruits and vegetables should be covered.

Q 3.. Answer the following questions

- a) Name the part of the digestive system that secretes saliva.

Ans _____
_____.

- b) Where is the digested food absorbed in the digestive system?

Ans _____
_____.

- c) What happens to the food in the large intestine?

Ans _____

d) Why does chappati starts tasting a little sweet when it is chewed for a long time?

Ans _____

e) What are the different components of the food we eat?

Ans _____

Q 4. Draw well labeled diagram of

a. digestive system.

b. Tongue